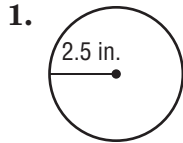
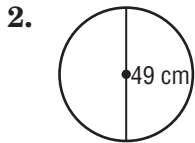


Chapter Quiz

Find the circumference of each circle. Round to the nearest tenth. Use 3.14 or $\frac{22}{7}$ for π .

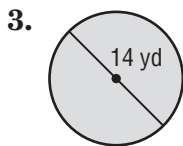


1. _____

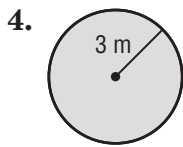


2. _____

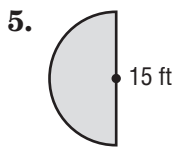
Find the area of each figure. Round to the nearest tenth. Use 3.14 or $\frac{22}{7}$ for π .



3. _____

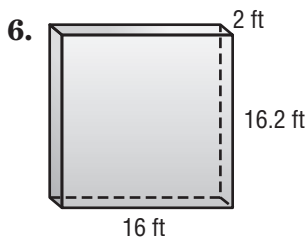


4. _____

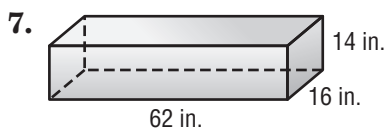


5. _____

Find the volume of each figure. Round to the nearest tenth if necessary.



6. _____



7. _____